

What
is
inside

Adding with Pictures



Interactive
Pages

Drag and
Drop
Activities

Worksheets
With
Answers


Differentiated
Questions and
Answers

∞ One More 

Two frogs in the pond. One more jumps in. How many frogs are in the pond?




Clear Back Next

∞ There are four frogs in the pond. 

How many frogs will be in the pond if 1 frog jumps in?

5 6 8

 Multiple choice question

Clear Back Next Submit

PREVIEW

Gain unlimited access to a large collection of interactive digital and print Maths resources

NOT a member? please sign up to gain complete access

If you are a member, please login to download this worksheet



Sign up

First Name


Last Name

Email

Password


I agree to the terms and conditions

Register



∞


Count the pictures and add them.




Clear Back Next


∞

Count the pictures and add them.



Clear Back Next Submit

∞ 



Clear Back Next Submit

∞ 



Clear Back Next Submit