



Name: _____

Date: _____

FACES, EDGES & VERTICES

WRITE THE NAME OF EACH SHAPE. ALSO, FIND THE NUMBER OF FACES, EDGES AND VERTICES.



Faces

Edges

Vertices

Name: _____



Faces

Edges

Vertices

Name: _____



Faces

Edges

Vertices

Name: _____


PREVIEW

Gain unlimited access to a large collection of interactive digital and print Maths resources

If you are a member, please login to download this worksheet



If you are NOT a member, please sign up to gain complete access




www.skoolmaths.com

Faces

Edges

Vertices

Name: _____



Faces

Edges

Vertices


Name: _____

Faces

Edges

Vertices

Name: _____

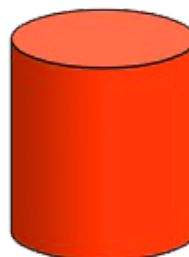


Faces

Edges

Vertices

Name: _____



Faces

Edges

Vertices

Name: _____

FACES, EDGES & VERTICES



ANSWERS



Faces

Edges

Vertices

Name: _____



Faces

Edges

Vertices

Name: _____




Name: _____

Faces

Edges

Vertices

Name: _____




Name: _____

Faces

Edges

Vertices

Name: _____

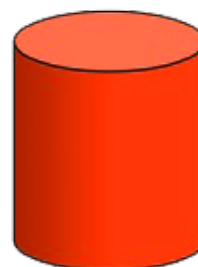


Faces

Edges

Vertices

Name: _____



Faces

Edges

Vertices

Name: _____

PREVIEW

Gain unlimited access to a large collection of interactive digital and print Maths resources

If you are a member, please login to download this worksheet



If you are NOT a member, please sign up to gain complete access



www.skoolmaths.com

NAME: _____

DATE: _____

FACES, EDGES & VERTICES

WRITE THE NAME OF EACH SHAPE. ALSO, FIND THE NUMBER OF FACES, EDGES AND VERTICES.




Faces
Edges
Vertices

Name: _____



Faces
Edges
Vertices

Name: _____



Faces
Edges
Vertices



Name: _____

PREVIEW

Gain unlimited access to a large collection of interactive digital and print Maths resources

If you are a member, please login to download this worksheet

If you are NOT a member, please sign up to gain complete access



www.skoolmaths.com

Faces
Edges
Vertices

Name: _____



Faces
Edges
Vertices

Name: _____



Faces
Edges
Vertices

Name: _____



Faces
Edges
Vertices

Name: _____



Faces
Edges
Vertices

Name: _____

FACES, EDGES & VERTICES



ANSWERS




Faces
Edges
Vertices

Name: _____



Faces
Edges
Vertices

Name: _____



Faces
Edges
Vertices

Faces
Edges
Vertices

Name: _____



Faces
Edges
Vertices

Faces
Edges
Vertices

Name: _____



Faces
Edges
Vertices

Name: _____



Faces
Edges
Vertices



Name: _____

PREVIEW

Gain unlimited access to a large collection of interactive digital and print Maths resources

If you are a member, please login to download this worksheet

If you are NOT a member, please sign up to gain complete access



www.skoolmaths.com